


VERHAAL



SOMMEN



Tafelboekje van:

www.verhaalsommen.nl

Verhaaltjessommen



Lees de verhaaltjes en reken de sommen uit.
Maak een tekening bij de som of schrijf de som op.

1. In een pak zitten 8 plakjes kaas.

Hoeveel plakjes zitten er in 6 pakken? _____ plakjes

2. De boekhandel verkoopt 4 agenda's van €8 per stuk.

Hoeveel euro is dat in totaal? _____ euro

3. In een zak zitten 8 bloembollen.

Hoeveel bloembollen zitten er in 9 zakken? _____ bloembollen

4. In een zakje zitten 8 snoepjes.

Hoeveel snoepjes zitten er in 5 zakjes? _____ snoepjes

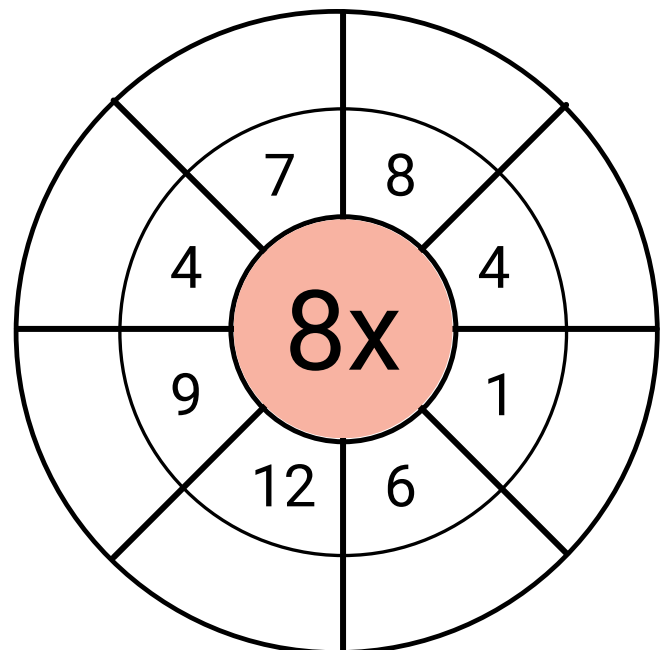
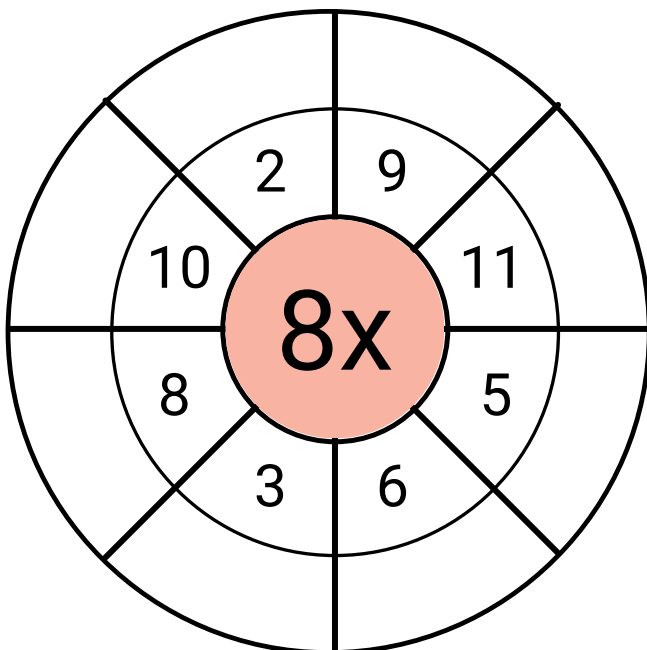
Geheime tekening

| | | | | | | | | | |
|------|------|------|-----|------|------|-----|------|------|------|
| 7x8 | 8x8 | 9x8 | 7x8 | 7x8 | 8x8 | 9x8 | 7x8 | 8x8 | 9x8 |
| 9x8 | 3x8 | 4x8 | 8x8 | 8x8 | 7x8 | 7x8 | 6x8 | 4x8 | 9x8 |
| 5x8 | 6x8 | 7x8 | 9x8 | 8x8 | 9x8 | 7x8 | 8x8 | 3x8 | 5x8 |
| 3x8 | 4x8 | 6x8 | 8x8 | 7x8 | 8x8 | 8x8 | 4x8 | 6x8 | 3x8 |
| 6x8 | 5x8 | 8x8 | 0x8 | 9x8 | 7x8 | 1x8 | 8x8 | 5x8 | 5x8 |
| 10x8 | 4x8 | 12x8 | 5x8 | 10x8 | 11x8 | 6x8 | 10x8 | 3x8 | 10x8 |
| 11x8 | 12x8 | 3x8 | 6x8 | 4x8 | 6x8 | 3x8 | 5x8 | 12x8 | 12x8 |
| 5x8 | 3x8 | 6x8 | 4x8 | 2x8 | 1x8 | 4x8 | 6x8 | 3x8 | 5x8 |
| 4x8 | 12x8 | 5x8 | 3x8 | 6x8 | 6x8 | 3x8 | 5x8 | 11x8 | 4x8 |
| 12x8 | 3x8 | 10x8 | 6x8 | 11x8 | 11x8 | 5x8 | 10x8 | 4x8 | 10x8 |

| Antwoord | Kleur |
|-------------------|------------|
| 0 tot en met 20 | zwart |
| 21 tot en met 50 | rood |
| 51 tot en met 75 | lichtblauw |
| 76 tot en met 100 | lichtbruin |



Tafel van 8 rad



De tafel van 8

Reken de sommen uit.



$1 \times 8 =$

$2 \times 8 =$

$3 \times 8 =$

$4 \times 8 =$

$5 \times 8 =$

$6 \times 8 =$

$7 \times 8 =$

$8 \times 8 =$

$9 \times 8 =$

$10 \times 8 =$

$3 \times 8 =$

$2 \times 8 =$

$8 \times 8 =$

$7 \times 8 =$

$7 \times 8 =$

$1 \times 8 =$

$4 \times 8 =$

$10 \times 8 =$

$5 \times 8 =$

$7 \times 8 =$

$1 \times 8 =$

$9 \times 8 =$

$2 \times 8 =$

$8 \times 8 =$

$3 \times 8 =$

$7 \times 8 =$

$4 \times 8 =$

$6 \times 8 =$

$5 \times 8 =$

$5 \times 8 =$

$2 \times 8 =$

$9 \times 8 =$

$8 \times 8 =$

$8 \times 8 =$

$1 \times 8 =$

$5 \times 8 =$

$5 \times 8 =$

$7 \times 8 =$

$6 \times 8 =$

$3 \times 8 =$

$6 \times 8 =$

$3 \times 8 =$

$7 \times 8 =$

$4 \times 8 =$

$8 \times 8 =$

Klaar? Oefen 10 verhaaltjessommen op www.verhaalsommen.nl

Daarna mag je als beloning een rekenspelletje spelen!

Rekenzoeker



Zoek en omcirkel keersommen van de tafel van 8.
Schrijf ze in de tabel.

| | | | | | | | |
|-----------|----|----|----|----|----|----|----|
| 2 | 40 | 12 | 6 | 24 | 8 | 12 | 9 |
| 1 x 8 = 8 | | | 35 | 2 | 0 | 8 | 8 |
| 6 | 5 | 7 | 3 | 8 | 24 | 96 | 72 |
| 10 | 8 | 80 | 72 | 16 | 4 | 32 | 64 |
| 12 | 7 | 10 | 64 | 8 | 8 | 64 | 80 |
| 48 | 8 | 6 | 24 | 30 | 12 | 88 | 96 |
| 16 | 56 | 3 | 2 | 60 | 4 | 8 | 32 |
| 24 | 8 | 5 | 8 | 12 | 8 | 11 | 3 |

| | |
|-----------|--|
| 1 x 8 = 8 | |
| | |
| | |
| | |
| | |
| | |

Kleurplaat tafel van 8

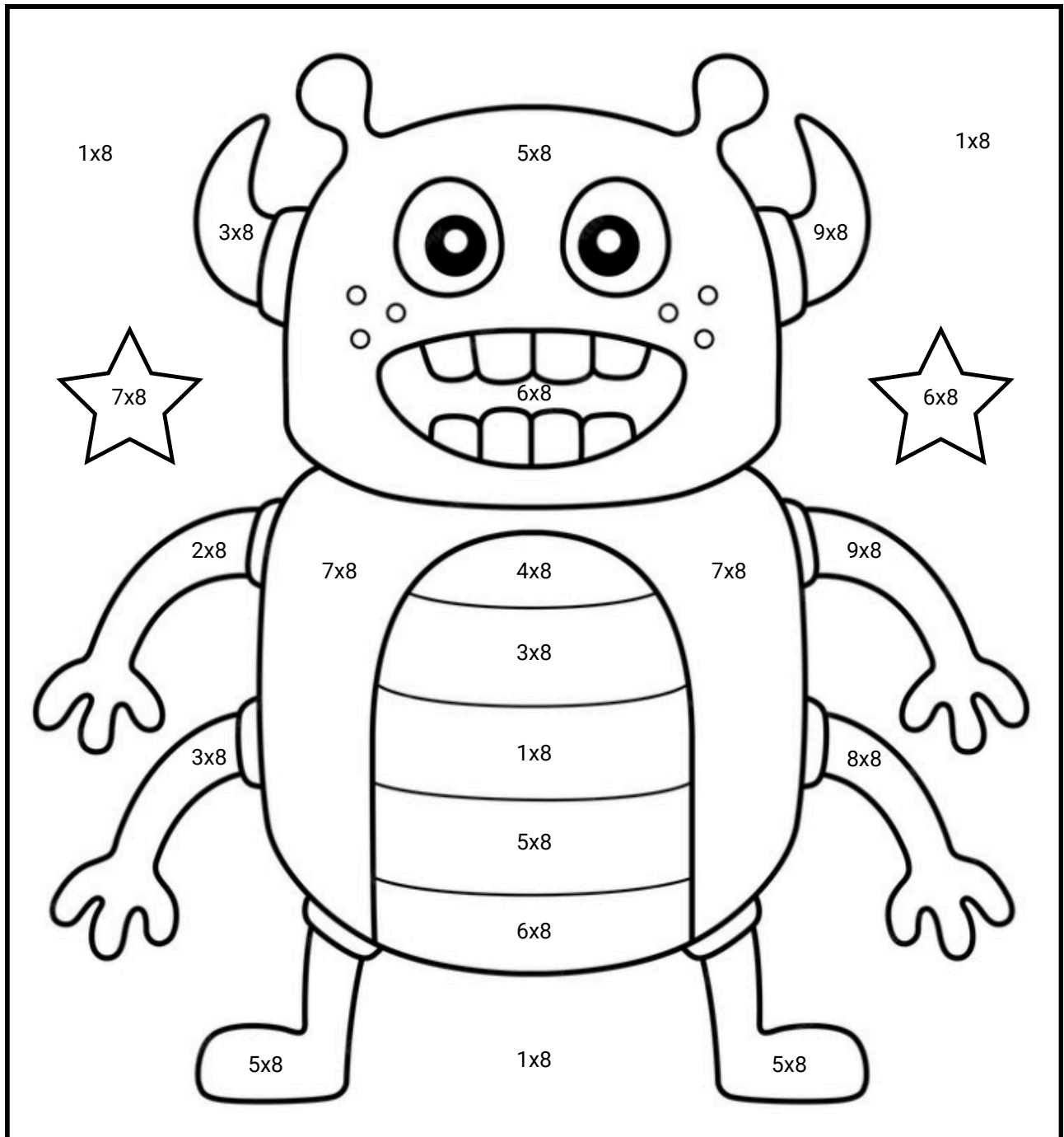


Welke kleur hoort bij het antwoord?

Reken uit en kleur in. Ben je klaar?

Ga dan naar www.verhaalsommen.nl


Speel het leuke rekenspelletje **Sommen en kleuren!**



Reken uit

Hoeveel samen?

Schrijf de keersom en het antwoord op.



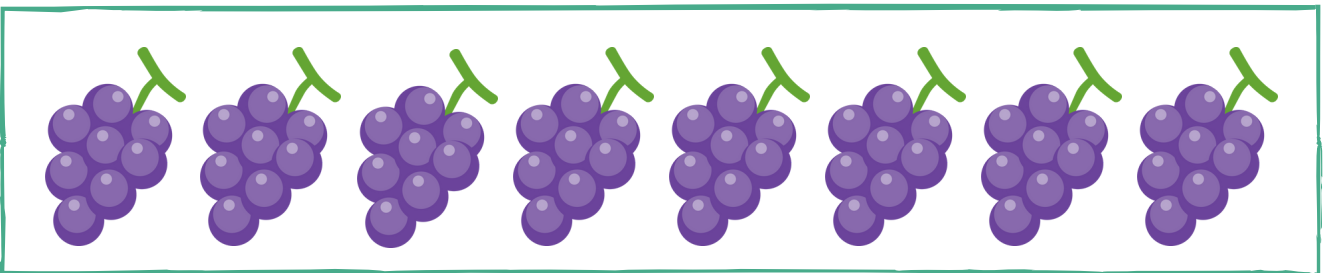
Keersom: $4 \times 8 =$ _____

Antwoord: _____ stiften



Keersom: _____

Antwoord: _____ kralen



Keersom: _____

Antwoord: _____ druiven

Klaar? Oefen 10 verhaaltjessommen op www.verhaalsommen.nl


Daarna mag je als beloning een rekenspelletje spelen!

Vul de tabel in



Vul de tabel in.

Denk aan de tafel van 8.



| | | | | |
|--------------|----------|----------|----------|----------|
| Spin | 1 | 2 | 4 | 6 |
| Poten | 8 | | | |



| | | | | |
|---------------|----------|----------|----------|----------|
| Pizza | 1 | 3 | 5 | 7 |
| Punten | 8 | | | |

Reken uit

$2 \times 8 =$

$5 \times 8 =$

$6 \times 8 =$

$9 \times 8 =$

$4 \times 8 =$

$3 \times 8 =$

$8 \times 8 =$

$7 \times 8 =$

$7 \times 8 =$

$8 \times 8 =$

$6 \times 8 =$

$4 \times 8 =$

$1 \times 8 =$

$3 \times 8 =$

$8 \times 8 =$

Klaar? Oefen 10 verhaaltjessommen op www.verhaalsommen.nl

Daarna mag je als beloning een rekenspelletje spelen!

Doolhof



Kleur de keersommen die goed zijn.
Vind zo een weg door het doolhof.

| | | | | | |
|--------------------|--------------------|--------------------|--------------------|--------------------|--------------------|
| $0 \times 8 = 8$ | $1 \times 8 = 8$ | $11 \times 8 = 81$ | $10 \times 8 = 8$ | $5 \times 8 = 35$ | $12 \times 8 = 88$ |
| $2 \times 8 = 18$ | $3 \times 8 = 24$ | $5 \times 8 = 40$ | $3 \times 8 = 26$ | $6 \times 8 = 49$ | $5 \times 8 = 48$ |
| $6 \times 8 = 49$ | $7 \times 8 = 58$ | $7 \times 8 = 56$ | $9 \times 8 = 72$ | $7 \times 8 = 54$ | $1 \times 8 = 1$ |
| $7 \times 8 = 53$ | $5 \times 8 = 41$ | $8 \times 8 = 88$ | $11 \times 8 = 88$ | $2 \times 8 = 16$ | $3 \times 8 = 32$ |
| $3 \times 8 = 12$ | $1 \times 8 = 0$ | $3 \times 8 = 26$ | $9 \times 8 = 76$ | $4 \times 8 = 32$ | $6 \times 8 = 48$ |
| $1 \times 8 = 8$ | $3 \times 8 = 24$ | $5 \times 8 = 40$ | $3 \times 8 = 15$ | $8 \times 8 = 68$ | $8 \times 8 = 64$ |
| $11 \times 8 = 88$ | $12 \times 8 = 92$ | $7 \times 8 = 56$ | $9 \times 8 = 72$ | $12 \times 8 = 96$ | $10 \times 8 = 80$ |
| $9 \times 8 = 72$ | $3 \times 8 = 21$ | $4 \times 8 = 31$ | $7 \times 8 = 57$ | $8 \times 8 = 63$ | $6 \times 8 = 47$ |
| $1 \times 8 = 8$ | $6 \times 8 = 46$ | $3 \times 8 = 24$ | $4 \times 8 = 32$ | $6 \times 8 = 48$ | $11 \times 8 = 81$ |
| $8 \times 8 = 64$ | $2 \times 8 = 16$ | $7 \times 8 = 56$ | $12 \times 8 = 92$ | $5 \times 8 = 40$ | $11 \times 8 = 88$ |
| $11 \times 8 = 87$ | $3 \times 8 = 21$ | $6 \times 8 = 42$ | $5 \times 8 = 35$ | $5 \times 8 = 42$ | $1 \times 8 = 8$ |
| $3 \times 8 = 24$ | $6 \times 8 = 48$ | $4 \times 8 = 32$ | $5 \times 8 = 40$ | $9 \times 8 = 72$ | $12 \times 8 = 96$ |
| $7 \times 8 = 56$ | $6 \times 8 = 49$ | $10 \times 8 = 8$ | $7 \times 8 = 54$ | $6 \times 8 = 49$ | $4 \times 8 = 34$ |
| $2 \times 8 = 16$ | $8 \times 8 = 64$ | $11 \times 8 = 88$ | $9 \times 8 = 72$ | $12 \times 8 = 96$ | $2 \times 8 = 18$ |

Eind

Teken het verhaal

Bedenk een verhaal bij de som en reken de som uit.

Je mag het verhaal tekenen of schrijven.



$$5 \times 8 =$$

$$7 \times 8 =$$

$$8 \times 8 =$$

$$4 \times 8 =$$

Klaar? Oefen 10 verhaaltjessommen op www.verhaalsommen.nl

Daarna mag je als beloning een rekenspelletje spelen!

Tafel tijd

Zet een timer op 2 minuten.
Hoeveel sommen kan jij maken?
Zet een streep tot waar je komt.



$9 \times 8 =$

$5 \times 8 =$

$9 \times 8 =$

$2 \times 8 =$

$2 \times 8 =$

$2 \times 8 =$

$8 \times 8 =$

$9 \times 8 =$

$7 \times 8 =$

$4 \times 8 =$

$8 \times 8 =$

$6 \times 8 =$

$3 \times 8 =$

$7 \times 8 =$

$3 \times 8 =$

$1 \times 8 =$

$3 \times 8 =$

$1 \times 8 =$

$10 \times 8 =$

$5 \times 8 =$

$3 \times 8 =$

$7 \times 8 =$

$10 \times 8 =$

$5 \times 8 =$

$5 \times 8 =$

$6 \times 8 =$

$7 \times 8 =$

$3 \times 8 =$

$7 \times 8 =$

$9 \times 8 =$

$7 \times 8 =$

$2 \times 8 =$

$2 \times 8 =$

$9 \times 8 =$

$3 \times 8 =$

$4 \times 8 =$

$6 \times 8 =$

$4 \times 8 =$

$6 \times 8 =$

$4 \times 8 =$

$5 \times 8 =$

$8 \times 8 =$

$2 \times 8 =$

$6 \times 8 =$

$10 \times 8 =$


Klaar? Oefen 10 verhaaltjessommen op www.verhaalsommen.nl


Daarna mag je als beloning een rekenspelletje spelen!


Vleksommen


Flip heeft inkt geknoeid.


Reken de sommen uit.





 $x 8 = 16$


 $x 8 = 80$


 $x 8 = 88$


 $x 8 = 40$


 $x 8 = 72$


 $x 8 = 56$


 $x 8 = 24$

 $x 8 = 8$

 $x 8 = 48$

 $x 8 = 64$






 $x 8 = 32$

 $x 8 = 96$






Klaar? Oefen 10 verhaaltjessommen op www.verhaalsommen.nl

Daarna mag je als beloning een rekenspelletje spelen!






Tel met sprongen van 8








16



80



104



136

Klaar? Oefen 10 verhaaltjessommen op www.verhaalsommen.nl

Daarna mag je als beloning een rekenspelletje spelen!

Antwoorden




Lees de verhaaltjes en reken de sommen uit.

Maak een tekening bij de som of schrijf de som op.

1. In een pak zitten 8 plakjes kaas.

Hoeveel plakjes zitten er in 6 pakken? 48 plakjes




2. De boekhandel verkoopt 4 agenda's van €8 per stuk.

Hoeveel euro is dat in totaal? 32 euro




3. In een zak zitten 8 bloembollen.

Hoeveel bloembollen zitten er in 9 zakken? 72 bloembollen



4. In een zakje zitten 8 snoepjes.

Hoeveel snoepjes zitten er in 5 zakjes? 40 snoepjes



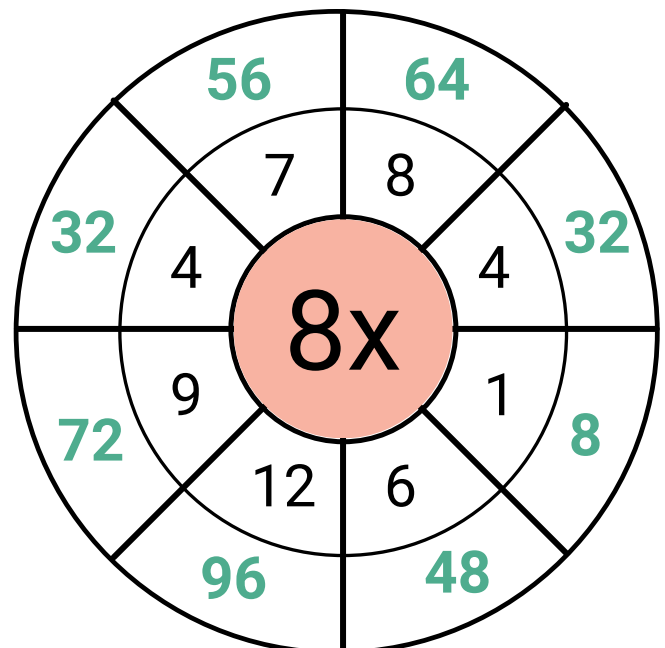
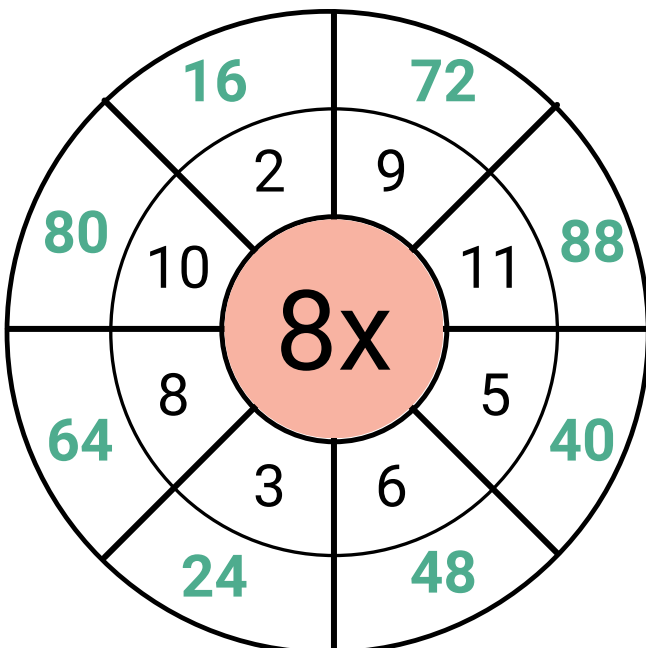
Geheime tekening

| | | | | | | | | | |
|------|------|------|-----|------|------|-----|------|------|------|
| 7x8 | 8x8 | 9x8 | 7x8 | 7x8 | 8x8 | 9x8 | 7x8 | 8x8 | 9x8 |
| 9x8 | 3x8 | 4x8 | 8x8 | 8x8 | 7x8 | 7x8 | 6x8 | 4x8 | 9x8 |
| 5x8 | 6x8 | 7x8 | 9x8 | 8x8 | 9x8 | 7x8 | 8x8 | 3x8 | 5x8 |
| 3x8 | 4x8 | 6x8 | 8x8 | 7x8 | 8x8 | 8x8 | 4x8 | 6x8 | 3x8 |
| 6x8 | 5x8 | 8x8 | 0x8 | 9x8 | 7x8 | 1x8 | 8x8 | 5x8 | 5x8 |
| 10x8 | 4x8 | 12x8 | 5x8 | 10x8 | 11x8 | 6x8 | 10x8 | 3x8 | 10x8 |
| 11x8 | 12x8 | 3x8 | 6x8 | 4x8 | 6x8 | 3x8 | 5x8 | 12x8 | 12x8 |
| 5x8 | 3x8 | 6x8 | 4x8 | 2x8 | 1x8 | 4x8 | 6x8 | 3x8 | 5x8 |
| 4x8 | 12x8 | 5x8 | 3x8 | 6x8 | 6x8 | 3x8 | 5x8 | 11x8 | 4x8 |
| 12x8 | 3x8 | 10x8 | 6x8 | 11x8 | 11x8 | 5x8 | 10x8 | 4x8 | 10x8 |

| Antwoord | Kleur |
|-------------------|------------|
| 0 tot en met 20 | zwart |
| 21 tot en met 50 | rood |
| 51 tot en met 75 | lichtblauw |
| 76 tot en met 100 | lichtbruin |



Tafel van 8 rad



De tafel van 8

Reken de sommen uit.



$1 \times 8 = 8$

$2 \times 8 = 16$

$3 \times 8 = 24$

$4 \times 8 = 32$

$5 \times 8 = 40$

$6 \times 8 = 48$

$7 \times 8 = 56$

$8 \times 8 = 64$

$9 \times 8 = 72$

$10 \times 8 = 80$

$3 \times 8 = 24$

$2 \times 8 = 16$

$8 \times 8 = 64$

$7 \times 8 = 56$

$7 \times 8 = 56$

$1 \times 8 = 8$

$4 \times 8 = 32$

$10 \times 8 = 80$

$5 \times 8 = 40$

$7 \times 8 = 56$

$5 \times 8 = 40$

$5 \times 8 = 40$

$7 \times 8 = 56$

$6 \times 8 = 48$

$3 \times 8 = 24$

$1 \times 8 = 8$

$9 \times 8 = 72$

$2 \times 8 = 16$

$8 \times 8 = 64$

$3 \times 8 = 24$

$7 \times 8 = 56$

$4 \times 8 = 32$

$6 \times 8 = 48$

$5 \times 8 = 40$

$5 \times 8 = 40$

$6 \times 8 = 48$

$3 \times 8 = 24$

$7 \times 8 = 56$

$4 \times 8 = 48$

$8 \times 8 = 64$

Klaar? Oefen 10 verhaaltjessommen op www.verhaalsommen.nl

Daarna mag je als beloning een rekenspelletje spelen!

Rekenzoeker



Zoek en omcirkel keersommen van de tafel van 8.
Schrijf ze in de tabel.

| | | | | | | | |
|----|----|----|----|----|----|----|----|
| 2 | 40 | 12 | 6 | 24 | 8 | 12 | 9 |
| 1 | = | 8 | 35 | 2 | 0 | x | x |
| | x | 8 | | x | | 8 | 8 |
| 6 | 5 | 7 | 3 | = | 24 | = | 72 |
| | x | 8 | | x | | 96 | |
| 10 | x | 8 | 72 | 16 | 4 | 32 | 64 |
| | = | 80 | | | | | |
| 12 | 7 | 10 | 64 | 8 | x | 8 | = |
| | x | 8 | | x | | 64 | 80 |
| 48 | = | 8 | 24 | 30 | 12 | 88 | 96 |
| | x | 6 | | | | = | |
| 16 | 56 | 3 | 2 | 60 | 4 | x | 8 |
| | | | | | x | = | 32 |
| 24 | 8 | 5 | 8 | 12 | 8 | x | 11 |
| | | | | | | | 3 |

| | |
|-------------------|--------------------|
| $1 \times 8 = 8$ | $7 \times 8 = 56$ |
| $2 \times 6 = 12$ | $8 \times 8 = 64$ |
| $3 \times 8 = 24$ | $9 \times 8 = 72$ |
| $4 \times 8 = 32$ | $10 \times 8 = 80$ |
| $5 \times 8 = 40$ | $11 \times 8 = 88$ |
| $6 \times 8 = 48$ | $12 \times 8 = 96$ |

Kleurplaat tafel van 8

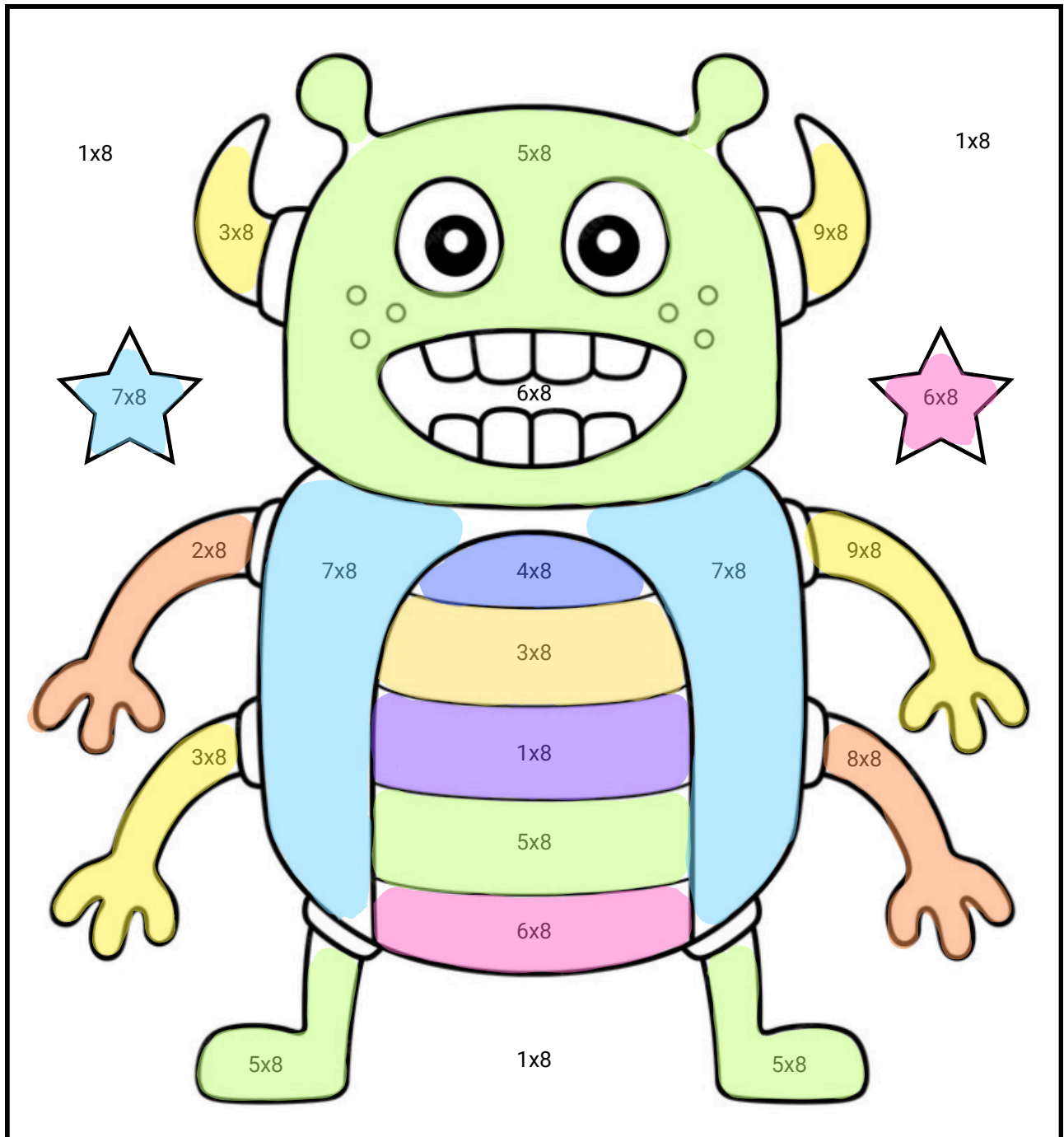


Welke kleur hoort bij het antwoord?

Reken uit en kleur in. Ben je klaar?

Ga dan naar www.verhaalsommen.nl


Speel het leuke rekenspelletje **Sommen en kleuren!**



Reken uit

Hoeveel samen?

Schrijf de keersom en het antwoord op.



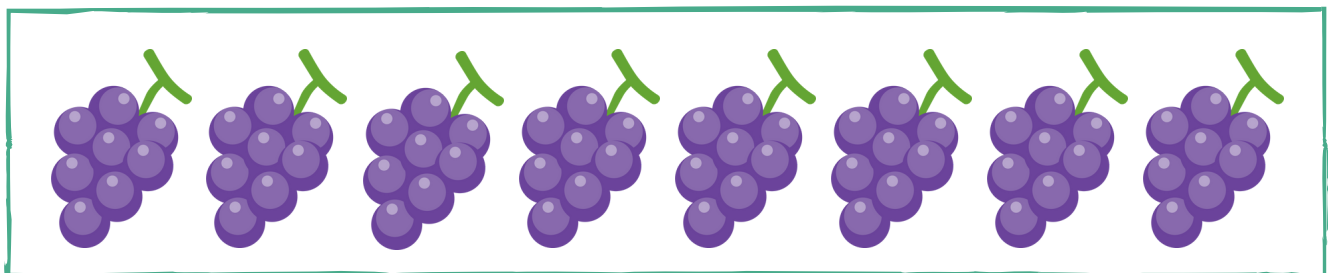
Keersom: $4 \times 8 =$ _____

Antwoord: **32** _____ stiften



Keersom: $6 \times 8 =$ _____

Antwoord: **48** _____ kralen



Keersom: $8 \times 8 =$ _____

Antwoord: **64** _____ druiven

Klaar? Oefen 10 verhaaltjessommen op www.verhaalsommen.nl


Daarna mag je als beloning een rekenspelletje spelen!

Vul de tabel in



Vul de tabel in.

Denk aan de tafel van 8.



| | | | | |
|--------------|----------|-----------|-----------|-----------|
| Spin | 1 | 2 | 4 | 6 |
| Poten | 8 | 16 | 32 | 48 |



| | | | | |
|---------------|----------|-----------|-----------|-----------|
| Pizza | 1 | 3 | 5 | 7 |
| Punten | 8 | 24 | 40 | 56 |

Reken uit

$2 \times 8 = 16$

$5 \times 8 = 40$

$6 \times 8 = 48$

$9 \times 8 = 72$

$4 \times 8 = 32$

$3 \times 8 = 24$

$8 \times 8 = 64$

$7 \times 8 = 56$

$7 \times 8 = 56$

$8 \times 8 = 64$

$6 \times 8 = 48$

$4 \times 8 = 32$

$1 \times 8 = 8$

$3 \times 8 = 24$

$8 \times 8 = 64$

Klaar? Oefen 10 verhaaltjessommen op www.verhaalsommen.nl

Daarna mag je als beloning een rekenspelletje spelen!

Doolhof



Kleur de keersommen die goed zijn.
Vind zo een weg door het doolhof.

| | | | | | | |
|--------------------|--------------------|--------------------|--------------------|--------------------|--------------------|--|
| | start | | | | | |
| $0 \times 8 = 8$ | $1 \times 8 = 8$ | $11 \times 8 = 81$ | $10 \times 8 = 8$ | $5 \times 8 = 35$ | $12 \times 8 = 88$ | |
| $2 \times 8 = 18$ | $3 \times 8 = 24$ | $5 \times 8 = 40$ | $3 \times 8 = 26$ | $6 \times 8 = 49$ | $5 \times 8 = 48$ | |
| $6 \times 8 = 49$ | $7 \times 8 = 58$ | $7 \times 8 = 56$ | $9 \times 8 = 72$ | $7 \times 8 = 54$ | $1 \times 8 = 1$ | |
| $7 \times 8 = 53$ | $5 \times 8 = 41$ | $8 \times 8 = 88$ | $11 \times 8 = 88$ | $2 \times 8 = 16$ | $3 \times 8 = 32$ | |
| $3 \times 8 = 12$ | $1 \times 8 = 0$ | $3 \times 8 = 26$ | $9 \times 8 = 76$ | $4 \times 8 = 32$ | $6 \times 8 = 48$ | |
| $1 \times 8 = 8$ | $3 \times 8 = 24$ | $5 \times 8 = 40$ | $3 \times 8 = 15$ | $8 \times 8 = 68$ | $8 \times 8 = 64$ | |
| $11 \times 8 = 88$ | $12 \times 8 = 92$ | $7 \times 8 = 56$ | $9 \times 8 = 72$ | $12 \times 8 = 96$ | $10 \times 8 = 80$ | |
| $9 \times 8 = 72$ | $3 \times 8 = 21$ | $4 \times 8 = 31$ | $7 \times 8 = 57$ | $8 \times 8 = 63$ | $6 \times 8 = 47$ | |
| $1 \times 8 = 8$ | $6 \times 8 = 46$ | $3 \times 8 = 24$ | $4 \times 8 = 32$ | $6 \times 8 = 48$ | $11 \times 8 = 81$ | |
| $8 \times 8 = 64$ | $2 \times 8 = 16$ | $7 \times 8 = 56$ | $12 \times 8 = 92$ | $5 \times 8 = 40$ | $11 \times 8 = 88$ | |
| $11 \times 8 = 87$ | $3 \times 8 = 21$ | $6 \times 8 = 42$ | $5 \times 8 = 35$ | $5 \times 8 = 42$ | $1 \times 8 = 8$ | |
| $3 \times 8 = 24$ | $6 \times 8 = 48$ | $4 \times 8 = 32$ | $5 \times 8 = 40$ | $9 \times 8 = 72$ | $12 \times 8 = 96$ | |
| $7 \times 8 = 56$ | $6 \times 8 = 49$ | $10 \times 8 = 8$ | $7 \times 8 = 54$ | $6 \times 8 = 49$ | $4 \times 8 = 34$ | |
| $2 \times 8 = 16$ | $8 \times 8 = 64$ | $11 \times 8 = 88$ | $9 \times 8 = 72$ | $12 \times 8 = 96$ | $2 \times 8 = 18$ | |

Eind

Teken het verhaal

Bedenk een verhaal bij de som en reken de som uit.

Je mag het verhaal tekenen of schrijven.



$$5 \times 8 =$$



$$7 \times 8 =$$



$$8 \times 8 =$$



$$4 \times 8 =$$



Klaar? Oefen 10 verhaaltjessommen op www.verhaalsommen.nl

Daarna mag je als beloning een rekenspelletje spelen!

Tafel tijd

Zet een timer op 2 minuten.
Hoeveel sommen kan jij maken?
Zet een streep tot waar je komt.



$9 \times 8 = 72$

$2 \times 8 = 16$

$8 \times 8 = 64$

$4 \times 8 = 32$

$3 \times 8 = 24$

$5 \times 8 = 40$

$2 \times 8 = 16$

$9 \times 8 = 72$

$8 \times 8 = 64$

$7 \times 8 = 56$

$9 \times 8 = 72$

$2 \times 8 = 16$

$7 \times 8 = 56$

$6 \times 8 = 48$

$3 \times 8 = 24$

$1 \times 8 = 8$

$10 \times 8 = 80$

$7 \times 8 = 56$

$5 \times 8 = 40$

$3 \times 8 = 24$

$3 \times 8 = 24$

$5 \times 8 = 40$

$10 \times 8 = 80$

$6 \times 8 = 48$

$7 \times 8 = 56$

$1 \times 8 = 8$

$3 \times 8 = 24$

$5 \times 8 = 40$

$7 \times 8 = 56$

$9 \times 8 = 72$

$7 \times 8 = 56$

$9 \times 8 = 72$

$6 \times 8 = 48$

$4 \times 8 = 32$

$2 \times 8 = 16$

$2 \times 8 = 16$

$3 \times 8 = 24$

$4 \times 8 = 32$

$5 \times 8 = 40$

$6 \times 8 = 48$

$2 \times 8 = 16$

$4 \times 8 = 32$

$6 \times 8 = 48$

$8 \times 8 = 64$

$10 \times 8 = 80$


Klaar? Oefen 10 verhaaltjessommen op www.verhaalsommen.nl

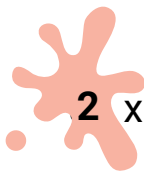
Daarna mag je als beloning een rekenspelletje spelen!


Vleksommen


Flip heeft inkt geknoeid.


Reken de sommen uit.

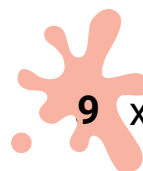



 $2 \times 8 = 16$


 $10 \times 8 = 80$


 $11 \times 8 = 88$


 $5 \times 8 = 40$


 $9 \times 8 = 72$


 $7 \times 8 = 56$


 $3 \times 8 = 24$

 $1 \times 8 = 8$

 $6 \times 8 = 48$

 $8 \times 8 = 64$


 $4 \times 8 = 32$

 $12 \times 8 = 96$


Klaar? Oefen 10 verhaaltjessommen op www.verhaalsommen.nl

Daarna mag je als beloning een rekenspelletje spelen!


Tel met sprongen van 8




8




16




24




32




40




48




56




64




72




80




88




96




104




112




120




128




136



144



152



160

Klaar? Oefen 10 verhaaltjessommen op www.verhaalsommen.nl

Daarna mag je als beloning een rekenspelletje spelen!